



Year 3 Winter

There are 4 daffodil bulbs in a pack. How many bulbs are there in 34 packs?



twinkl.co.uk

Year 3 Winter

One ski lesson at the local dry ski slope costs £21 for a child and £29 for an adult. How much would it cost for 2 adults and 3 children to have one lesson?



twinkl.co.uk

Year 3 Winter

The snow has been falling for 6 minutes. It now measures 25mm deep. If it continues to snow for the next 12 minutes at the same rate, how deep will the snow be in cm?



twinkl.co.uk

Year 3 Winter

Hot chocolate is sold in mugs which hold 200ml. How many mugs can be filled from 1000ml of hot chocolate?



twinkl.co.uk

Year 3 Winter


There are 48 children at the ski club. They are divided into 8 groups. How many children are in each group?



twinkl.co.uk

Year 3 Winter

Ice skating on a Monday costs £5.50 and £8 to hire the skates. On a Saturday it costs £6 and £8.50 to hire the skates. If Sam and Gina want to skate, how much will it cost them altogether for each of these days?



twinkl.co.uk

Year 3 Winter

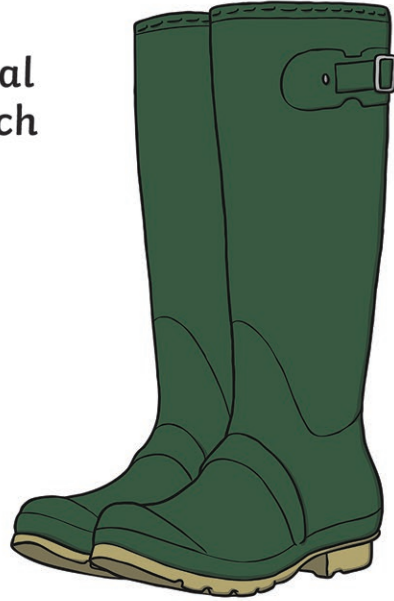
The garden centre is selling bags of grit to melt the snow, weighing 23kg. How much will 6 bags of grit weigh altogether?



twinkl.co.uk

Year 3 Winter

8 pairs of children's thermal wellies cost £136. How much would one pair cost?



twinkl.co.uk

Year 3 Winter

Gemma buys a hot chocolate for £1.85, a chocolate muffin for £1.30 and a hot dog. She pays with a £5 note and is given 65p change. How much was the hot dog?



twinkl.co.uk

Year 3 Winter


The time is 14:20. It will get dark in 93 minutes. What time will it become dark?



twinkl.co.uk

Year 3 Winter

Adult tickets cost £8 to go on the Giant Wheel in the Winter Wonderland. A child's ticket costs £6. How much would it cost for 3 adults and 4 children?



twinkl.co.uk

Year 3 Winter

It usually takes Noah 16 minutes to walk home from school. On this snowy day, it takes him three times as long. How long does it take him in the snow?



twinkl.co.uk

Year 3 Winter

Nat and Brynn are having a snowball fight. Nat makes 32 snowballs, and Brynn makes $\frac{3}{8}$ of this amount. How many snowballs does Brynn make?



twinkl.co.uk

Year 3 Winter


It begins to snow at 8:05. The snowfall lasts 85 minutes. What time does it stop?



twinkl.co.uk

Year 3 Winter


In the morning, the temperature was 7°C . By lunchtime, it measured 12°C , then by 5pm it was 4°C . What was the difference between the morning temperature and the 5pm temperature?



twinkl.co.uk

Year 3 Winter

A farmer had 64 sheep on the snowy fields. He needs to herd them into 4 pens to keep them safe from the snow. How many sheep would be in each pen?



twinkl.co.uk

Year 3 Winter

Ted makes 5 snowballs in 7 minutes. How many snowballs will he have made in 21 minutes?



twinkl.co.uk

Year 3 Winter

At the outdoor skating rink, it costs £3.20 to skate for 30 minutes. How much would it cost for 90 minutes?



twinkl.co.uk

Year 3 Winter

Candles come in packs of 4. If there are 160 candles altogether, how many packs would that be?



twinkl.co.uk

Year 3 Winter Answers

- | | | |
|--------------------|------------------|--------------------|
| 1. 136 bulbs | 8. £17 | 15. 3°C difference |
| 2. £121 | 9. £1.20 | 16. 16 |
| 3. 7.5cm | 10. 15:53 | 17. 15 snowballs |
| 4. 5 mugs | 11. £48 | 18. £9.60 |
| 5. 6 in each group | 12. 48 minutes | 19. 40 |
| 6. Mon £27 Sat £29 | 13. 12 snowballs | |
| 7. 138kg | 14. 9:30 | |